




Rainbow Maths

A progressive Maths journey for Pre-primary learners.

Rainbow – Mathematics

Pre-Primary Year 1 – Year 3

This Rainbow educational series is a great way for kids to learn English and Urdu alphabets, words, numbers, and counting and develop fine motor skills through tracing. The main objective of these books is to help children learn the correct formation of letters and numbers. The uniqueness of this series can be gauged from the fact that children learn writing as well as singular, plural, masculine and feminine, antonyms, names of fruits and vegetables, names of colours and days of the week, as well as many more words of daily use. Pages based on engaging activities and frequent revision exercises will help to bring out children's capabilities to their fullest.



Age-appropriate instructions to follow.

Date: _____

Trace the number 8.

Date: _____

Trace the number by following the arrows and colour.

Date: _____

Trace the patterns.


Tracing shapes and patterns worksheets.

Date: _____

Trace the number by following the arrows and colour.

Vibrant and visually appealing pictures.

Large and clear text for practice.



Counting and number recognition.

Date: _____

Count and circle the correct number.

4 5 6

5 4 6

6 5 4

Date: _____

Learn and write.

1	c	n	e		
1	o	n	e		
1	o	n	e		
1	o	n	e		
1	o	n	e		
2	t	w	o		
2	t	w	o		
2	t	w	o		
2	t	w	o		
2	t	w	o		

48

Tailored for early learners.

Date: _____

Count and write the number of beads.

66

Hands-on Maths skills.

Date: _____

What comes in between?


87

Date: _____

Write the missing numbers of the clock.

59

Simple yet engaging activities.



Progressive complexity

Plenty of revision exercises.

Date: _____

Review: Shapes

Read the statement and draw the shape.

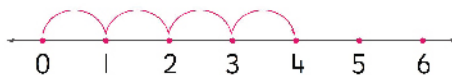
I have no sides.

I have four equal sides.

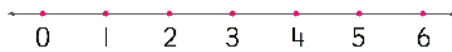
Date: _____

Number Lines: Addition

Add with the help of number line.



$$1 + 3 = \square$$



$$0 + 4 = \square$$



$$1 + 5 = \square$$



$$2 + 4 = \square$$

s. I have two long and two short sides.

Basic addition and subtraction sums.

39

Date: _____

Add the numbers, then write even or odd for answer.

$$\begin{array}{r} 6 \\ + 3 \\ \hline 9 \end{array} \text{ odd}$$

$$\begin{array}{r} 5 \\ + 0 \\ \hline \end{array} \square$$

$$\begin{array}{r} 7 \\ + 3 \\ \hline \end{array} \square$$

$$\begin{array}{r} 4 \\ + 3 \\ \hline \end{array} \square$$

$$\begin{array}{r} 9 \\ + 5 \\ \hline \end{array} \square$$

$$\begin{array}{r} 6 \\ + 5 \\ \hline \end{array} \square$$

54

Date: _____

Read the statements and draw the minutes and hour hand on the analog clock.

I wake up at 6 o'clock.



My school bus arrives at half past 07:00.



I do my homework at 10 o'clock.



We go to play outside at 10 o'clock.



I go to bed at half past 8.



73

Make learning enjoyable and effective.

Date: _____

Counting 2 times table

Reinforcement: 2 times table

2	x	4	=	
2	x	5	=	
2	x	6	=	
2	x	7	=	
2	x	8	=	

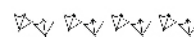
Count the set of feet then multiply by 2 to get your answer.



$$2 \text{ set of } 2 \quad 2 \times 2 = 4$$



$$\square \text{ set of } 2 \quad \square \times \square = \square$$



$$\square \text{ set of } 2 \quad \square \times \square = \square$$



$$\square \text{ set of } 2 \quad \square \times \square = \square$$

71

Basic to advanced concepts transition.



Helpline

+923363-008-008

For your suggestions and feedback, write us at: info@bookmark.com.pk

Follow us on:

/BookmarkPublishing

/bookmarkpublishingpak

/infobookmark

/bookmarkpublishing

/bookmarkpublishing

www.bookmark.com.pk